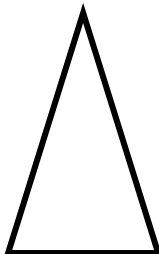

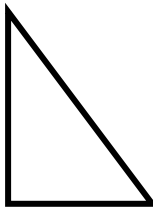


Thursday 18th June 2020

What shape am I?



Which shape am I describing? Write the number next to the shape and cross them off as you use the description.

- | | |
|---|-----|
| 1) I have got four right angles. | () |
| 2) I have got 3 acute angles. | () |
| 3) I have got 2 acute angles and one right angle. | () |
| 4) I have got one acute angle. | () |
| 5) I have got one right angle. | () |
| 6) I have got no right angles. | () |

Write in degrees, 2 examples for each of these angles-

a) Acute _____

b) Obtuse _____

Use the shapes on your table for examples and draw 5 different shapes with a ruler.

Then say how many of each angle these shapes have.

